


Can you find the
5 pizza toppings?

C	H	E	E	S	E	V	R	M
H	S	Q	A	D	G	B	L	U
P	E	P	P	E	R	B	R	S
L	V	E	A	S	F	L	T	H
K	S	K	C	K	S	W	G	R
H	A	M	D	N	C	M	W	O
O	G	D	E	G	K	M	D	O
U	D	F	K	F	L	N	M	M
S	W	E	E	T	C	O	R	N

mushroom • ham • cheese • sweetcorn • pepper

Can you draw
the other side of
the cow?



Maths Game!

Can you use your brain
to work out these sums?

$$8 \bigcirc 2 \bigcirc 4 = 6 \quad 8 \bigcirc 5 \bigcirc 4 = 7$$

$$7 \bigcirc 1 \bigcirc 3 = 9 \quad 6 \bigcirc 6 \bigcirc 4 = 8$$

$$3 \bigcirc 4 \bigcirc 5 = 12 \quad 9 \bigcirc 5 \bigcirc 3 = 7$$

1 (across) bee 1 (down) butterfly 2. strawberry
3. fish 4. leaf 5. lizard 6. hive 7. flower
8. mushroom 9. (across) stone 9. (down) stump
10. ladybug 11. mouse 12. grass 13. cloud
Answer: NATURE

• THE •
NORTH STAR
★
SHAW

CHILDREN
£7.95

All served with a fruit shoot and ice cream
Choose 1 main and 2 sides


SECTION 1
CHEESE BURGER
FISH GOUJONS
CHICKEN GOUJONS
VEGAN SAUSAGE VE

SECTION 2
FRIES
MASH
CHIPS
NEW POTATOES


SECTION 3
GARDEN PEAS
MUSHY PEAS
BAKED BEANS
SIDE SALAD




Colour me in!



Can you spot the 12 differences?



Can you help chef get the pizza out of the oven?



Can you finish the picture?

